

Digital Design & Computer Arch.

Lab 5 Supplement: Implementing an ALU

Prof. Onur Mutlu

ETH Zürich

Spring 2021

13 April 2021

What Will We Learn?

- In lab 5, you will **Implement an Arithmetic Logic Unit (ALU) in Verilog and evaluate its speed and resource utilization.**
- Draw a **block level diagram** of the MIPS 32-bit ALU, based on the description in the textbook.
- Implement the ALU using Verilog.
- Synthesize the ALU and evaluate **speed and FPGA resource utilization.**

Part 1: Designing an ALU

- We will design an ALU that can perform a subset of the ALU operations of a full MIPS ALU.
 - 2 32-bit **inputs**
 - 4-bit AluOp signal to **select the operation**
 - 32-bit **output**
 - Output **flag zero** that sets to logic-1 if all the bits of the result are 0.

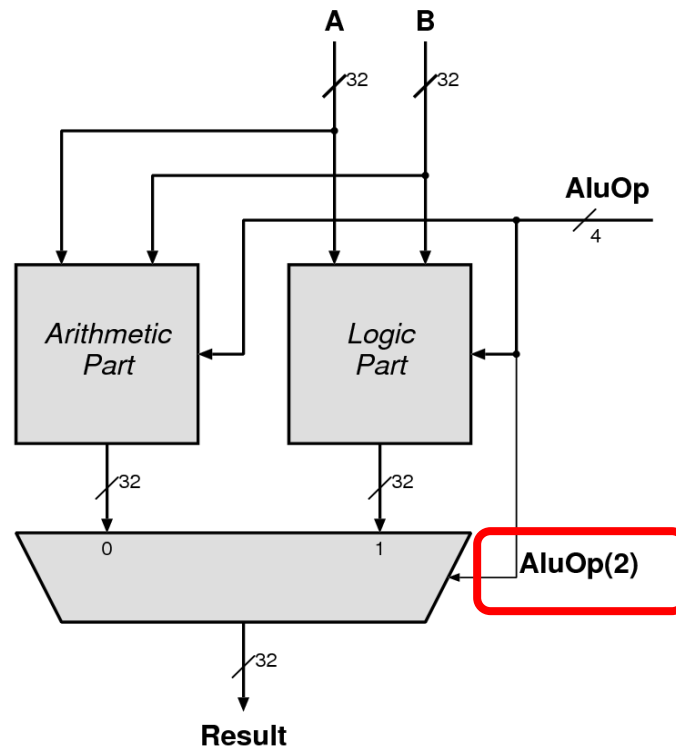
AluOp (3:0)	Mnemonic	Result =	Description
0000	add	$A + B$	Addition
0010	sub	$A - B$	Subtraction
0100	and	A and B	Logical and
0101	or	A or B	Logical or
0110	xor	$A \text{ xor } B$	Exclusive or
0111	nor	A nor B	Logical nor
1010	slt	$(A - B)[31]$	Set less than
Others	n.a.	Don't care	

Part 1: Designing an ALU- Block Diagram

- First, you need to draw a block diagram of the ALU, like the one seen in **Figure 5.15 of the H&H textbook**.
- You are free to choose if you want to draw the complete block diagram or split it up into modules and elaborate the modules, similar to the next slide.

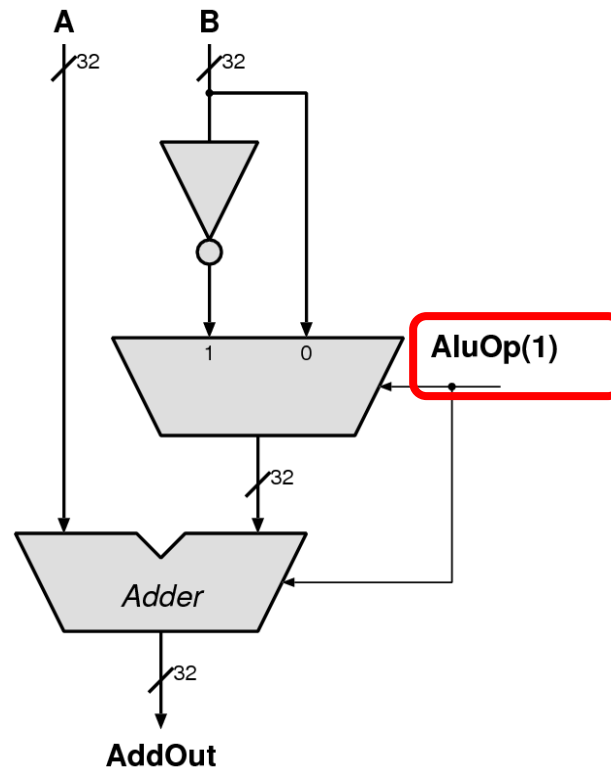
Part 1: Designing an ALU- Block Diagram

- A possible division in ALU Logic and Arithmetic operations:



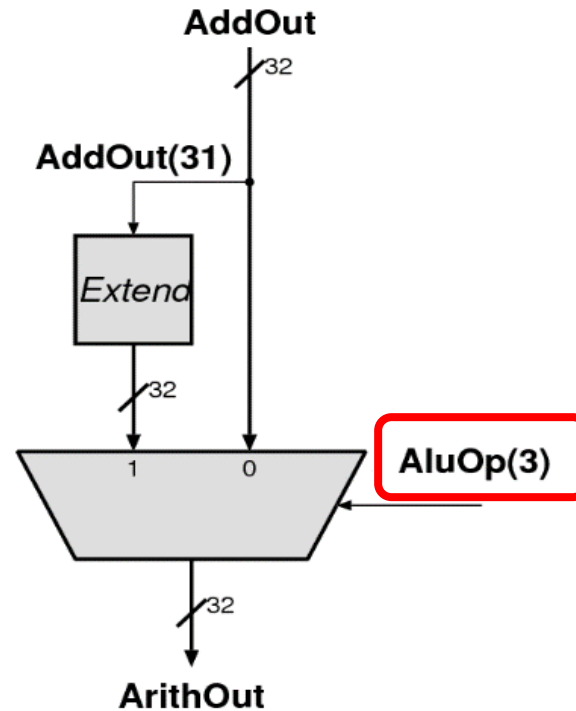
Part 1: Designing an ALU- Block Diagram

- A possible organization of **ADD** and **SUB**:



Part 1: Designing an ALU- Block Diagram

- A possible organization for **SLT**:



Part 2: Implementation

- Replace each block with a Verilog description.
- Synthesize and implement your design.
- We do not transfer the design to FPGA in this lab
 - No Constraint file → Bitstream generation will fail.
- At this point, we cannot verify the correctness of our circuit manually.
 - You will calculate how long will the exhaustive search take.
 - You learn how to use testbench to test the correctness of this circuit in lab 6! 😊

Part 3: The performance of the circuit (I)

- In this lab, we will learn to check:
 - The **speed** (i.e., max frequency our circuit can run at)
 - The **area** (i.e., FPGA resource utilization).
- We will add a timing constraint to set the **maximum delay** that we would like our ALU to have.

Part 3: The performance of the circuit (II)

- The information we will obtain:

Number of LUTs	
Number of bonded IOBs	
Which pin of the FPGA is the output 'zero' connected? (pin name)	
Where does the longest path start from	
Where does the longest path end	
How long is the longest path	
How much of the longest path is routing	
How many levels of logic is in the longest path	

Last Words

- In lab 5, you will **Implement an Arithmetic Logic Unit (ALU) in Verilog and evaluate its speed and resource utilization.**
- Draw a **block level diagram** of the MIPS 32-bit ALU, based on the description in the textbook.
- Implement the ALU using Verilog.
- Synthesize the ALU and evaluate **speed and FPGA resource utilization.**
- **In the report,** you will use your adder from Lab 2 in the ALU and compare the resource utilization.

Report Deadline

23:59, 7 May 2021

Digital Design & Computer Arch.

Lab 5 Supplement: Implementing an ALU

Prof. Onur Mutlu

ETH Zürich

Spring 2021

13 April 2021